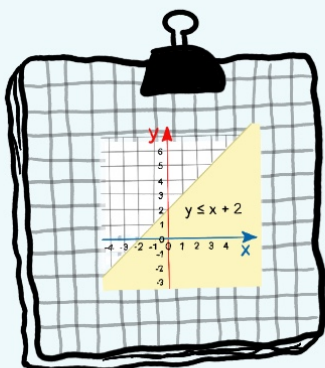


# Equations



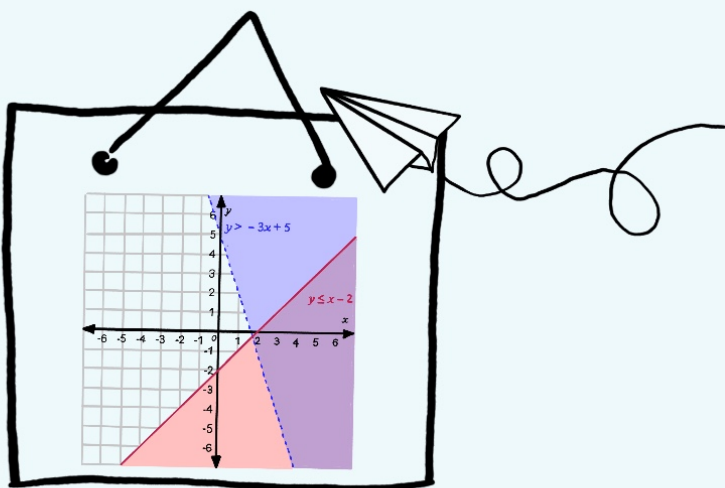
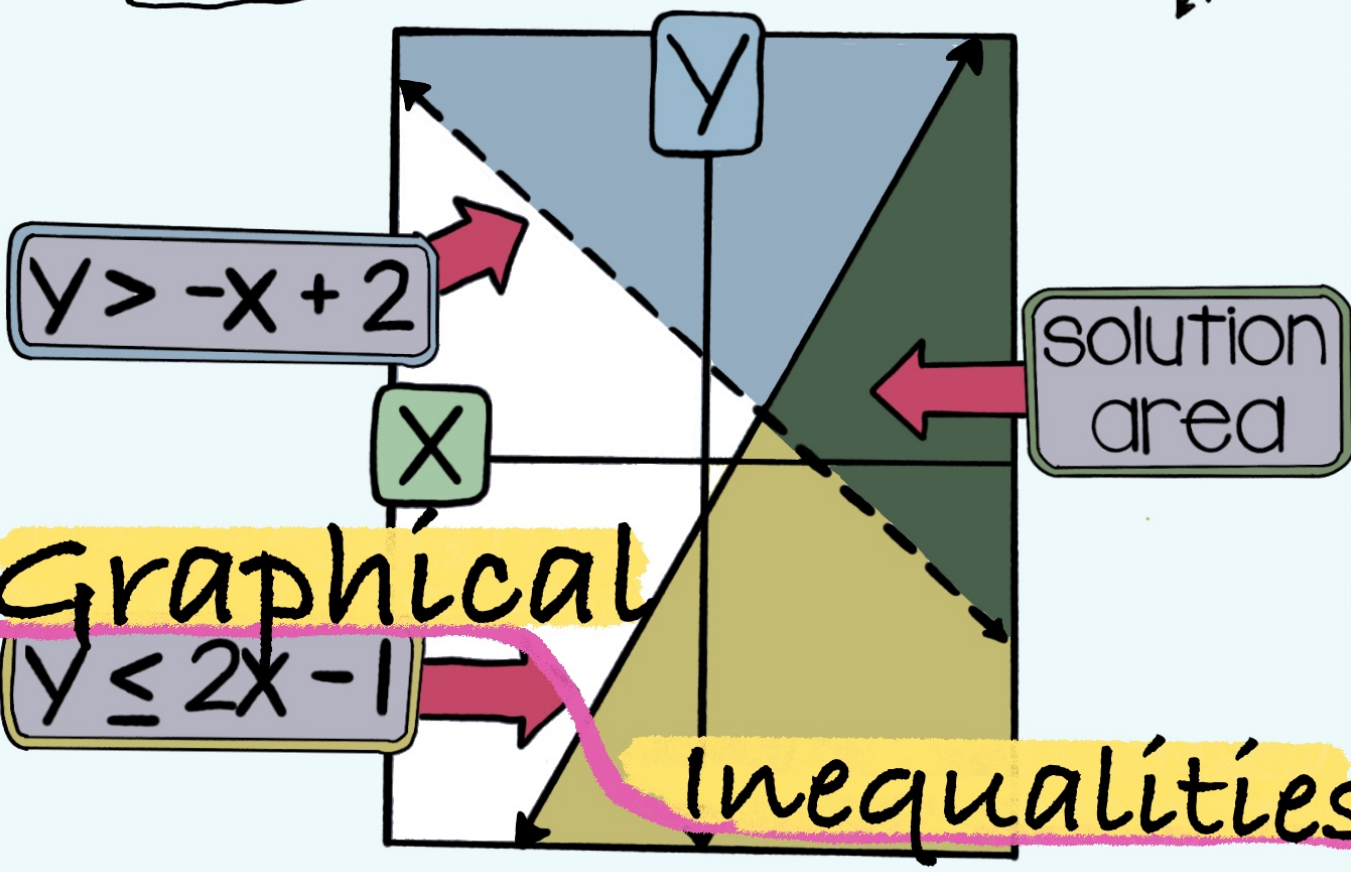
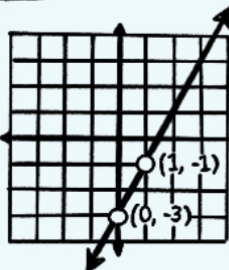
$y = 2x - 3$  (y-intercept)  $b (0, -3)$

Slope  $m$

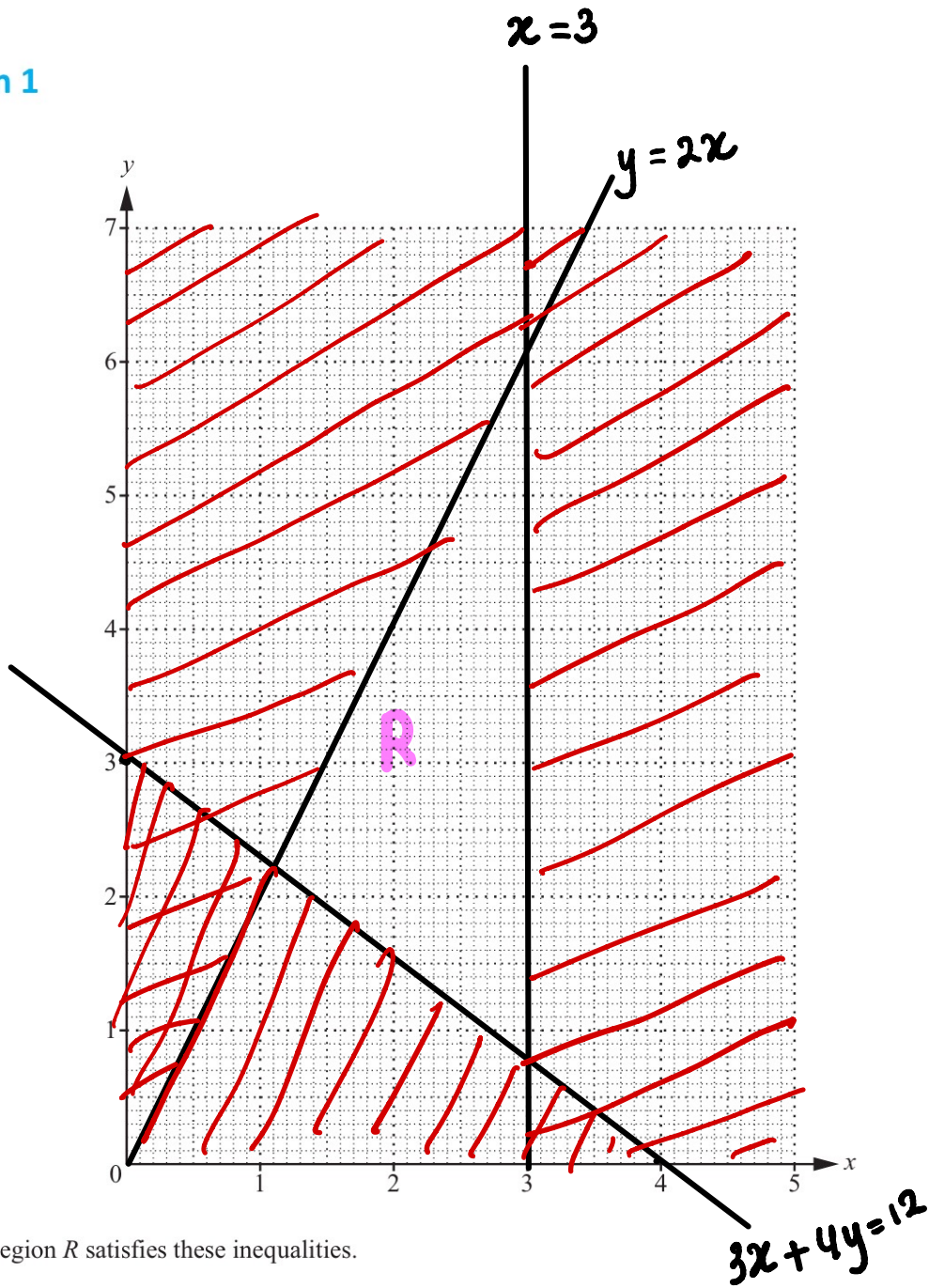
1  $x$   $y$   
(y-intercept)  
1  $y = 2(1) - 3 = -1$

3 plot

x	y
0	-3
1	-1



Question 1



The region  $R$  satisfies these inequalities.

$$y \leq 2x$$

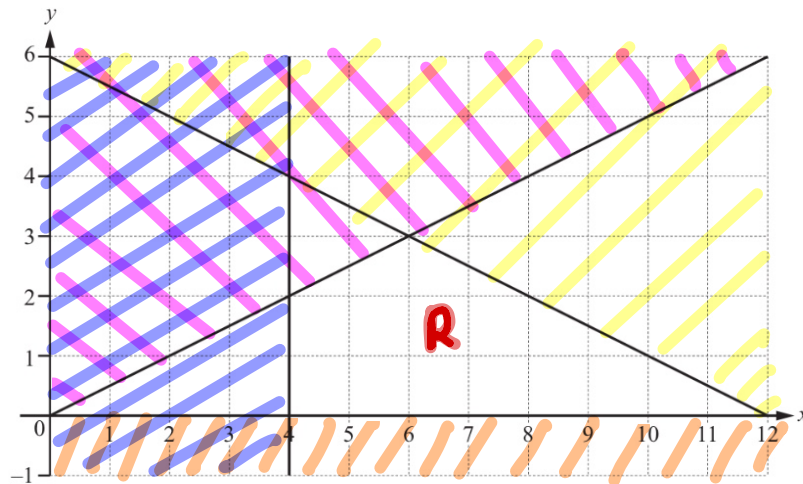
$$3x + 4y \geq 12$$

$$x \leq 3$$

On the grid, draw and label the region  $R$  that satisfies these inequalities.  
Shade the **unwanted** regions.

[5]

## Question 2



By shading the **unwanted** regions of the grid, find and label the region  $R$  which satisfies the following four inequalities.

$$y \geq 0$$

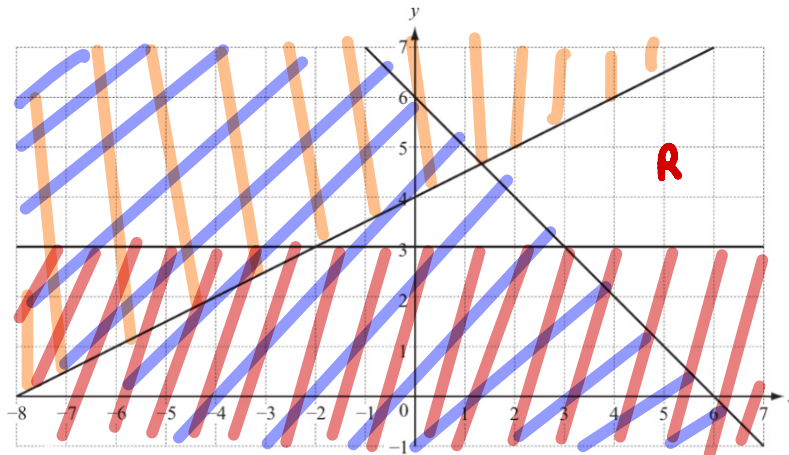
$$x \geq 4$$

$$2y \leq x$$

$$2y + x \leq 12$$

[3]

## Question 3



The region  $R$  contains points which satisfy the inequalities

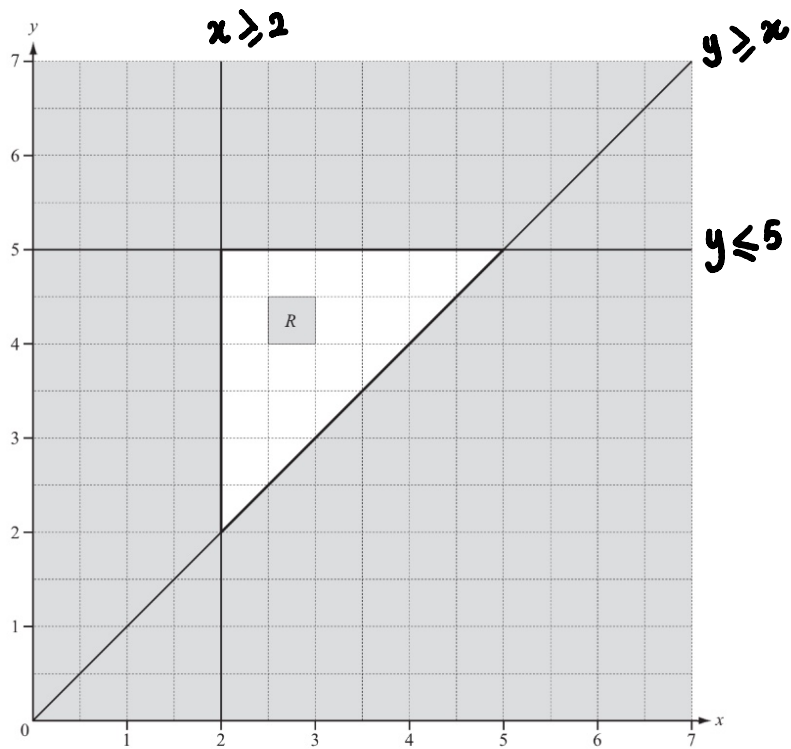
$$y \leq \frac{1}{2}x + 4, \quad y \geq 3 \quad \text{and} \quad x + y \geq 6.$$

On the grid, label with the letter  $R$  the region which satisfies these inequalities.

You must shade the **unwanted** regions.

[3]

### Question 4

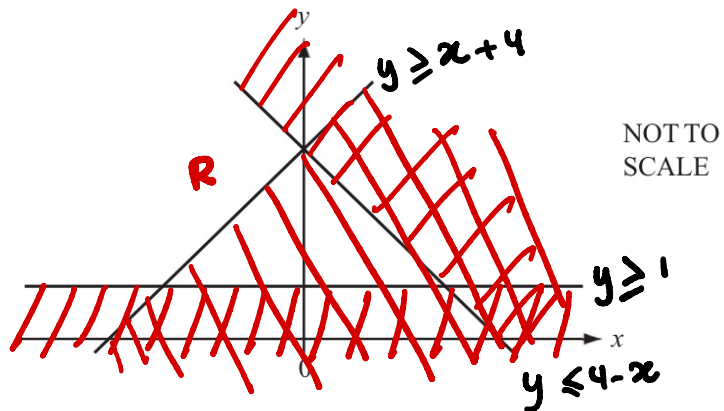


The region  $R$  is bounded by three lines.

Write down the three inequalities which define the region  $R$ .

[4]

### Question 5

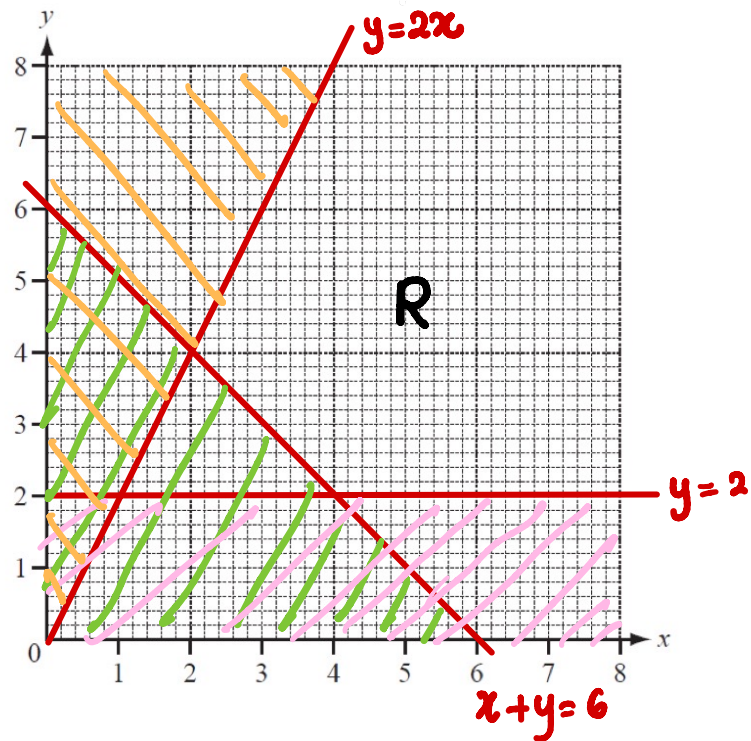


The diagram shows the lines  $y = 1$ ,  $y = x + 4$  and  $y = 4 - x$ .

On the diagram, **label the region  $R$**  where  $y \geq 1$ ,  $y \geq x + 4$  and  $y \leq 4 - x$ .

[3]

## Question 6



(a) Draw the lines  $y = 2$ ,  $x + y = 6$  and  $y = 2x$  on the grid above.

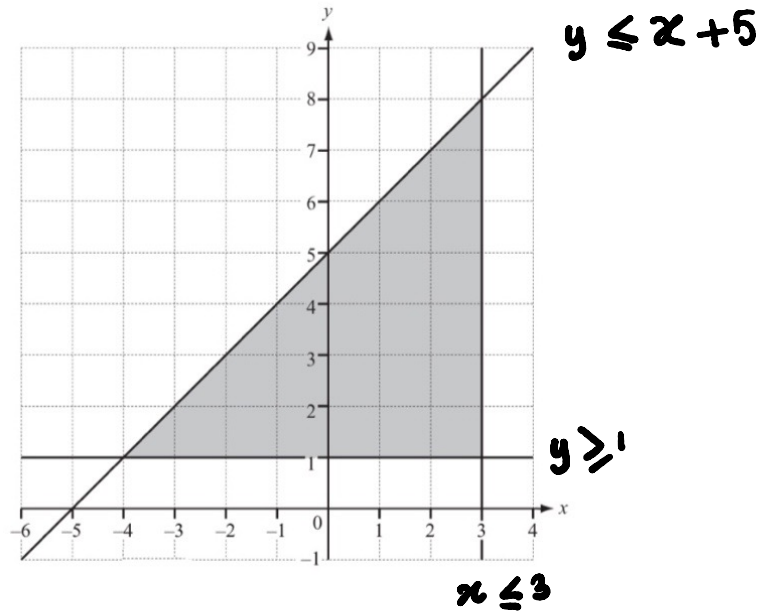
[4]

(b) Label the region  $R$  which satisfies the three inequalities

$$x + y \geq 6, \quad y \geq 2 \quad \text{and} \quad y \leq 2x.$$

[1]

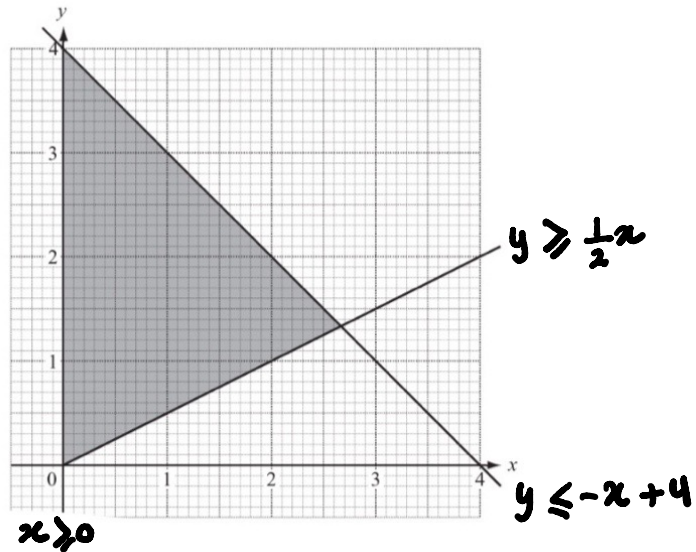
### Question 7



Find the three inequalities which define the shaded triangle in the diagram.

[5]

### Question 1



Find the three inequalities which define the shaded region on the grid.

[5]

## Question 2

A new school has  $x$  day students and  $y$  boarding students.

The fees for a day student are \$600 a term.

The fees for a boarding student are \$1200 a term.

The school needs at least \$720 000 a term.

- (a) Show that this information can be written as  $x + 2y \geq 1200$ . [1]

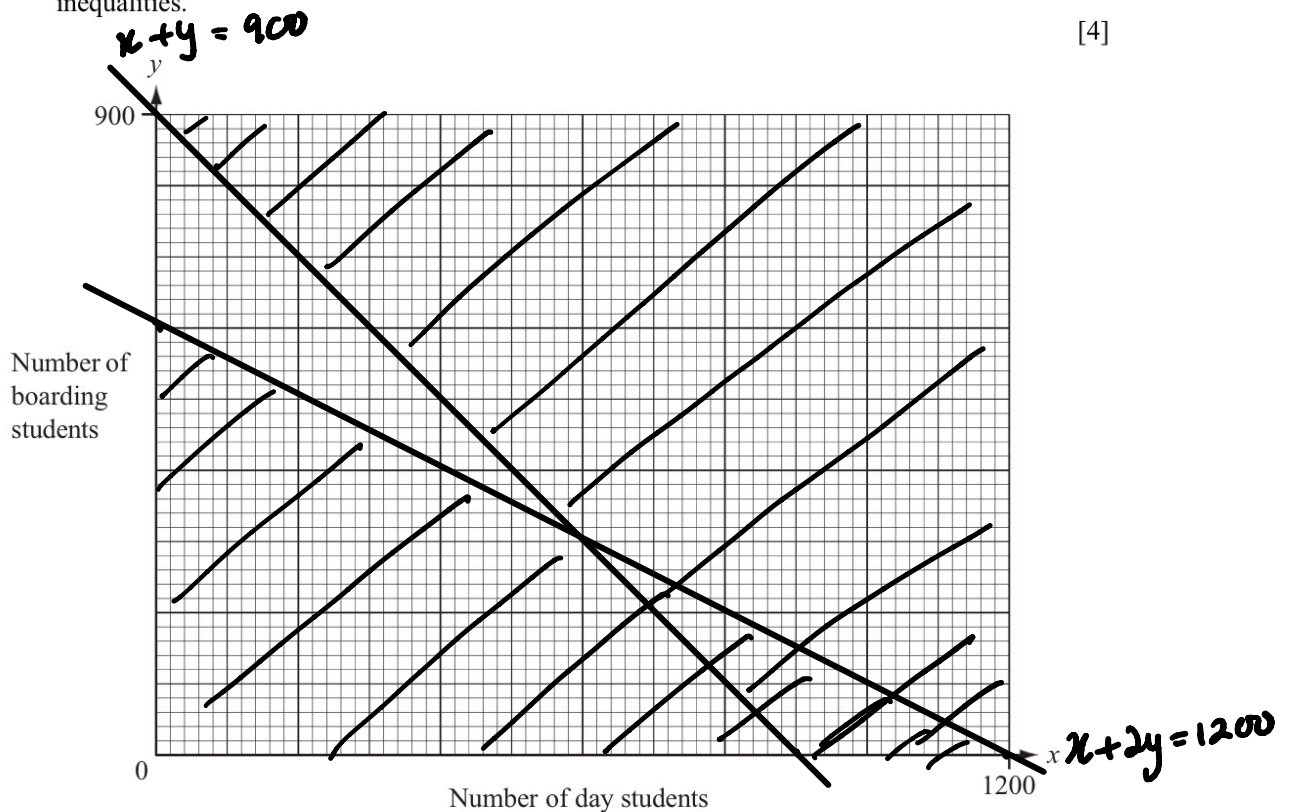
$$600x + 1200y \geq 720000$$

$$x + 2y \geq 1200$$

- (b) The school has a maximum of 900 students.  
Write down an inequality in  $x$  and  $y$  to show this information. [1]

$$x + y \leq 900$$

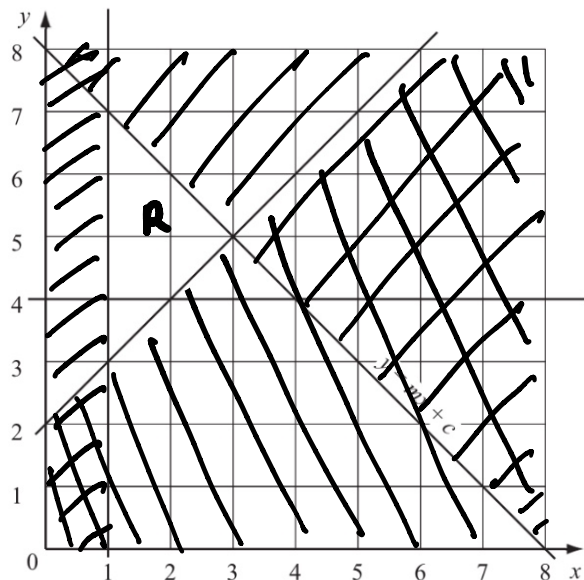
- (c) Draw two lines on the grid below and write the letter **R** in the region which represents these two inequalities. [4]



- (d) What is the least number of **boarding** students at the school? [1]

300

### Question 3



- (a) One of the lines in the diagram is labelled  $y = mx + c$ .  
Find the values of  $m$  and  $c$ . [1]

$$m = -1$$

$$c = 8$$

- (b) Show, by shading all the unwanted regions on the diagram, the region defined by the inequalities [1]

$$x \geq 1, \quad y \leq mx + c, \quad y \geq x + 2 \quad \text{and} \quad y \geq 4.$$

- Write the letter R in the region required. [2]

### Question 4

A ferry has a deck area of  $3600 \text{ m}^2$  for parking cars and trucks. Each car takes up  $20 \text{ m}^2$  of deck area and each truck takes up  $80 \text{ m}^2$ . On one trip, the ferry carries  $x$  cars and  $y$  trucks.

- (a) Show that this information leads to the inequality  $x + 4y \leq 180$ . [2]

$$20x + 80y \leq 3600$$

$$x + 4y \leq 180 \text{ (shown)}$$

- (b) The charge for the trip is \$25 for a car and \$50 for a truck.  
The total amount of money taken is \$3000.  
Write down an equation to represent this information and simplify it. [2]

$$\$25x + \$50y \geq \$3000$$

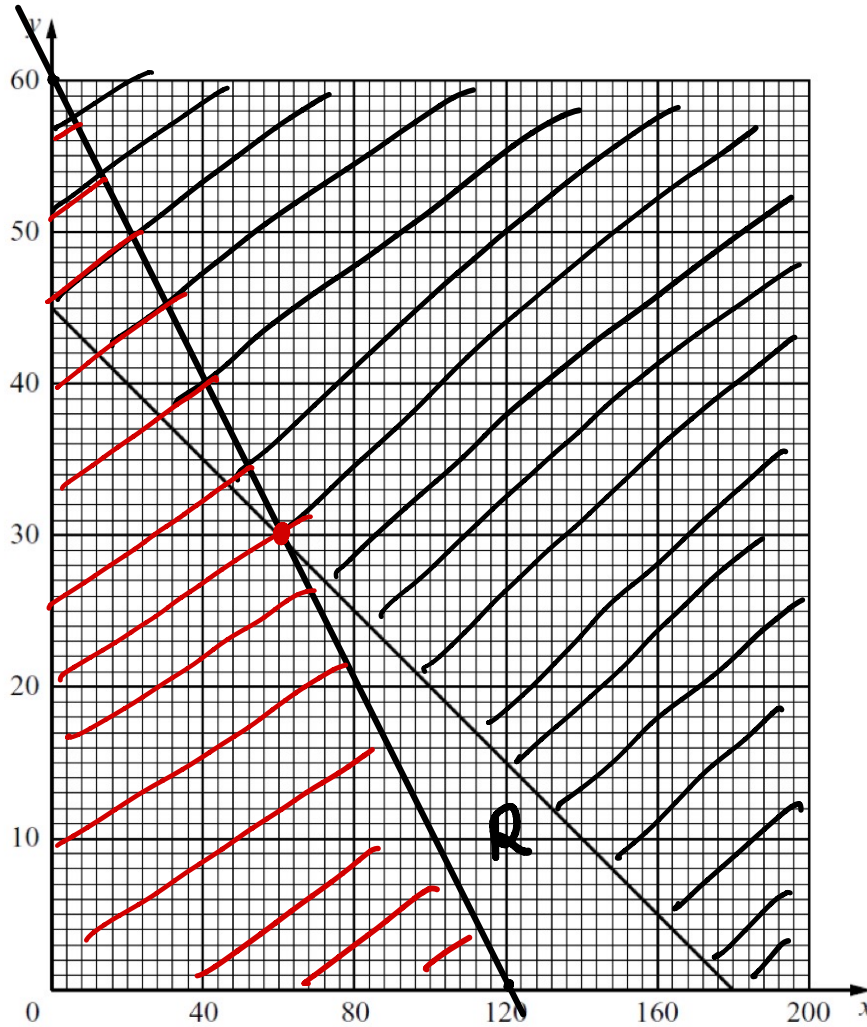
$$x + 2y \geq 120$$



(c) The line  $x + 4y = 180$  is drawn on the grid below.

(i) Draw, on the grid, the graph of your equation in part (b).

[1]



(ii)

Write down a possible number of cars and a possible number of trucks on the trip, which together satisfy both conditions.

$(60, 30)$

[1]

## Question 5

Marina goes to the shop to buy loaves of bread and cakes.  
 One loaf of bread costs 60 cents and one cake costs 80 cents.  
 She buys  $x$  loaves of bread and  $y$  cakes.

- (a) She must not spend more than \$12.  
 Show that  $3x + 4y \leq 60$ .

[1]

$$\begin{aligned} 60x + 80y &\leq 1200 \\ \div 10 & 6x + 8y \leq 120 \\ \div 2 & 3x + 4y \leq 60 \end{aligned}$$

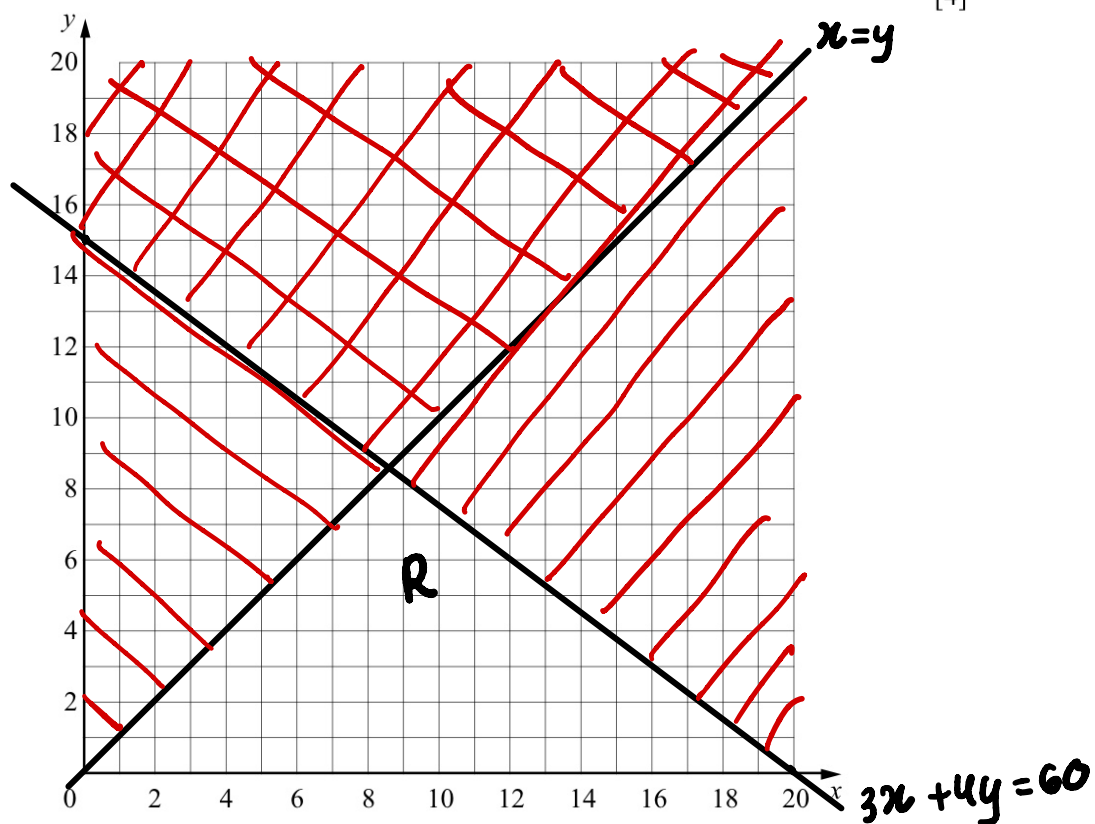
- (b) The number of loaves of bread must be greater than or equal to the number of cakes.  
 Write down an inequality in  $x$  and  $y$  to show this information.

[1]

$$x \geq y$$

- (c) On the grid below show the two inequalities by shading the **unwanted** regions.  
 Write  $R$  in the required region.

[4]

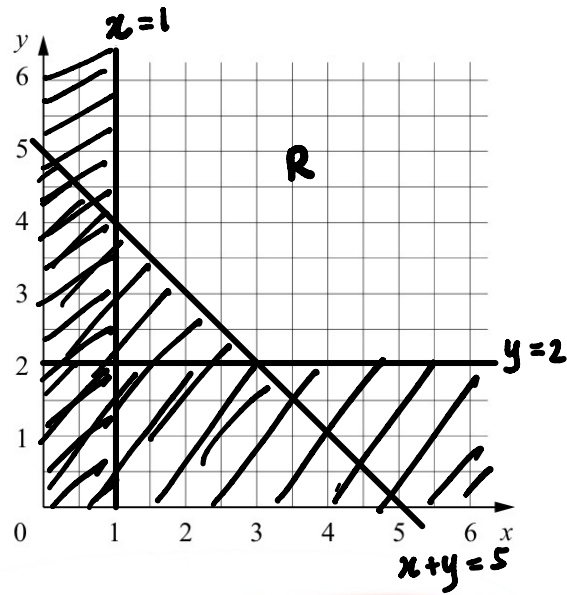


- (d) The **total** number of loaves of bread and cakes is  $x + y$ .  
 Find the largest possible value of  $x + y$ .

[1]

$$x + y = 18 + 1 = 19$$

### Question 6



- (a) On the grid, draw the lines  $x=1$ ,  $y=2$  and  $x+y=5$ .

[3]

- (b) Write  $R$  in the region where  $x \geq 1$ ,  $y \geq 2$  and  $x+y \geq 5$ .

[1]

## Question 1

In one week, Neha spends  $x$  hours cooking and  $y$  hours cleaning.  
 The time she spends cleaning is at least equal to the time she spends cooking.  
 This can be written as  $y \geq x$ .

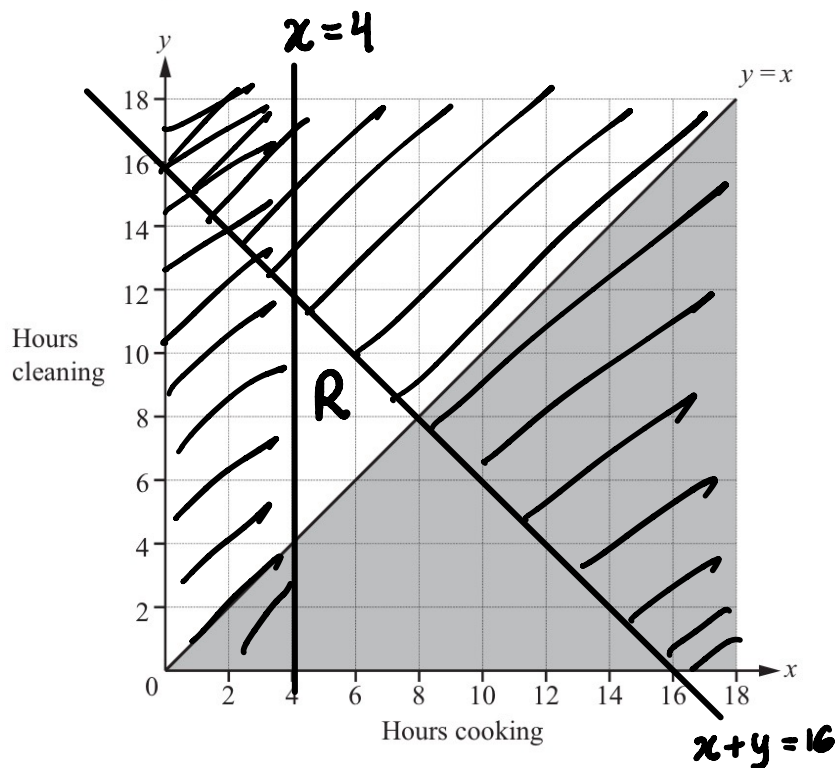
She spends no more than 16 hours in total cooking and cleaning.  
 She spends at least 4 hours cooking.

(a) Write down two more inequalities in  $x$  and/or  $y$  to show this information. [2]

$$x + y \leq 16$$

$$x \geq 4$$

(b) Complete the diagram to show the three inequalities.  
 Shade the **unwanted** regions. [3]



(c) Neha receives \$10 for each hour she spends cooking and \$8 for each hour she spends cleaning. [2]

Work out the largest amount she could receive.

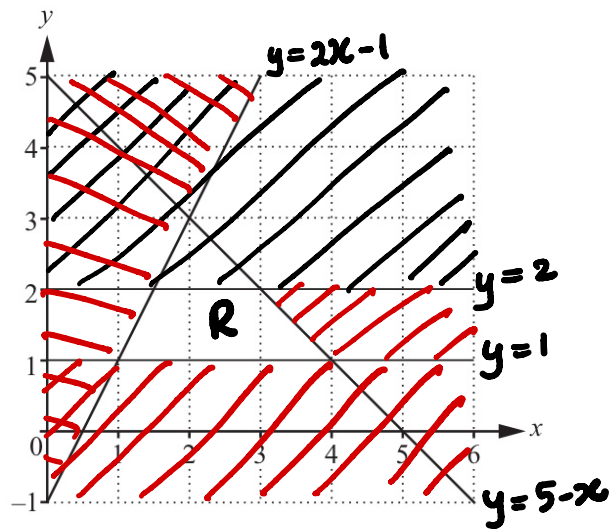
$$10x + 8y$$

$$= 80 + 64$$

$$= \$144$$

$(8, 8)$

### Question 2



By shading the **unwanted** regions of the grid, find and label the region  $R$  that satisfies the following four inequalities.

$$y \leq 2$$

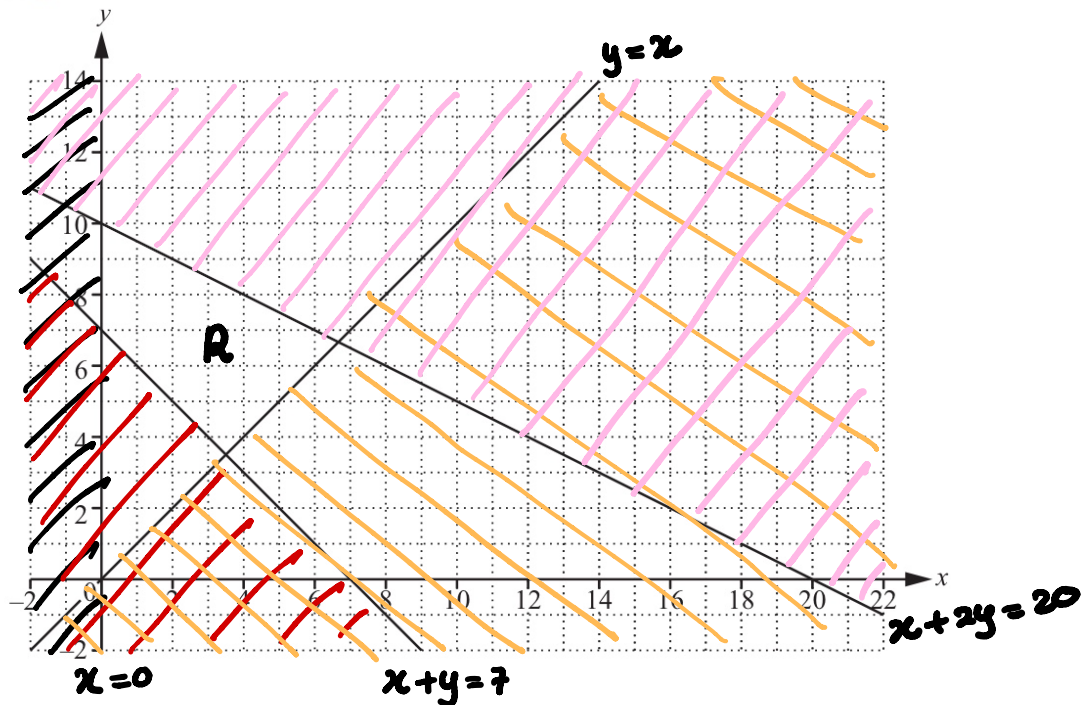
$$y \geq 1$$

$$y \leq 2x - 1$$

$$y \leq 5 - x$$

[3]

### Question 3



By shading the unwanted regions of the grid above, find and label the region  $R$  that satisfies the following four inequalities.

$$x \geq 0$$

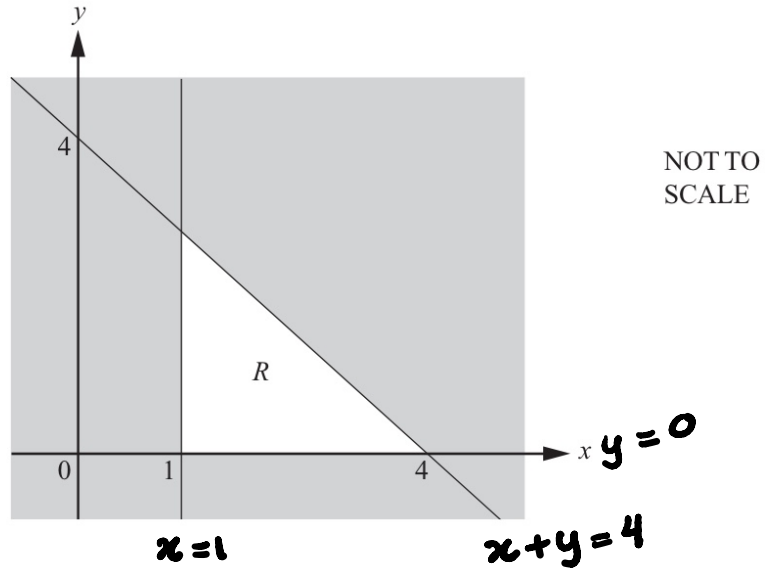
$$x + y \geq 7$$

$$y \geq x$$

$$x + 2y \leq 20$$

[3]

### Question 4



Write down the three inequalities that define the unshaded region,  $R$ .

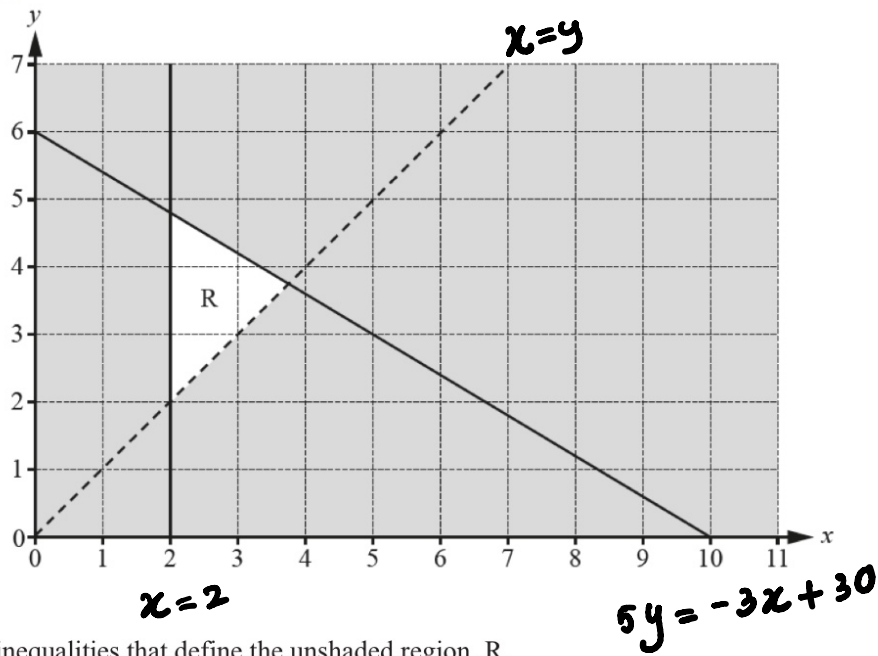
[4]

$$y \geq 0$$

$$x \geq 1$$

$$x + y \leq 4$$

### Question 5



Find the three inequalities that define the unshaded region,  $R$ .

[5]

$$y > x$$

$$x \geq 2$$

$$5y \leq -3x + 30$$